

Name: _____

Date: _____

Let's Practice **Adding 3 Numbers**

Solve each equation.

$$5 + 2 + 6 = \underline{\hspace{2cm}}$$

$$1 + 3 + 4 = \underline{\hspace{2cm}}$$

$$2 + 9 + 7 = \underline{\hspace{2cm}}$$

$$3 + 6 + 4 = \underline{\hspace{2cm}}$$

$$9 + 9 + 1 = \underline{\hspace{2cm}}$$

$$7 + 1 + 8 = \underline{\hspace{2cm}}$$

$$9 + 2 + 3 = \underline{\hspace{2cm}}$$

Name: _____

Date: _____

Let's Practice **Adding 3 Numbers**

Use the double ten frame to solve each equation.

$6 + 5 + 3 = \underline{\quad}$

$9 + 1 + 7 = \underline{\quad}$

$10 + 6 + 4 = \underline{\quad}$

$2 + 3 + 3 = \underline{\quad}$

$8 + 4 + 7 = \underline{\quad}$

$9 + 9 + 1 = \underline{\quad}$

Name: _____

Date: _____

Let's Practice **Adding 3 Numbers**

Draw a picture to solve each equation.

$$4 + 1 + 3 = \underline{\quad}$$

$$4 + 7 + 6 = \underline{\quad}$$

$$5 + 5 + 9 = \underline{\quad}$$

$$3 + 7 + 8 = \underline{\quad}$$

Name: _____

Date: _____

Let's Practice **Adding 3 Numbers**

Circle the two numbers that make 10.

Solve each equation.

$$2 + 8 + 1 = \underline{\hspace{2cm}}$$

$$5 + 6 + 5 = \underline{\hspace{2cm}}$$

$$4 + 1 + 9 = \underline{\hspace{2cm}}$$

$$10 + 0 + 8 = \underline{\hspace{2cm}}$$

$$6 + 6 + 4 = \underline{\hspace{2cm}}$$

$$5 + 3 + 7 = \underline{\hspace{2cm}}$$

$$2 + 6 + 8 = \underline{\hspace{2cm}}$$

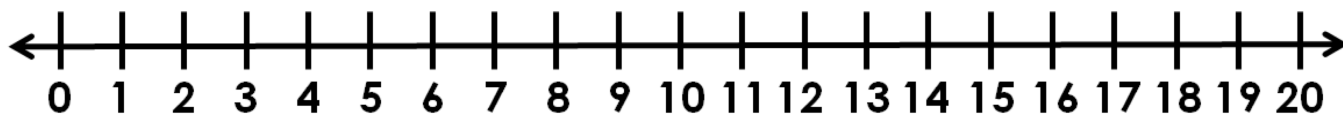
Name: _____

Date: _____

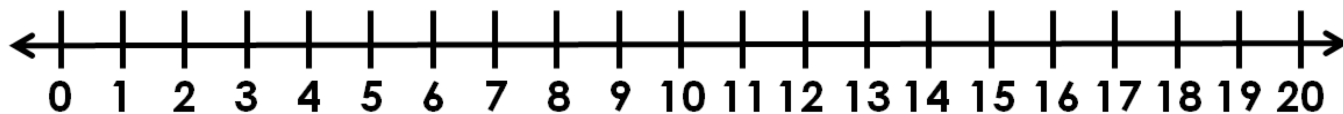
Let's Practice **Adding 3 Numbers**

Use the number line to solve each equation.

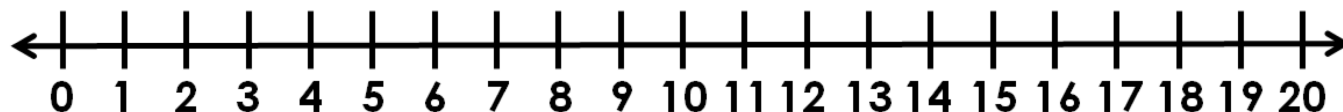
$$6 + 3 + 4 = \underline{\hspace{2cm}}$$



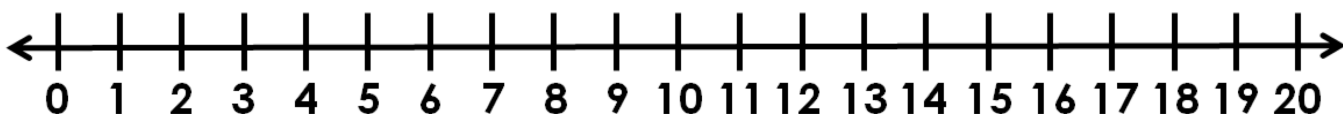
$$1 + 5 + 9 = \underline{\hspace{2cm}}$$



$$7 + 2 + 3 = \underline{\hspace{2cm}}$$



$$8 + 8 + 1 = \underline{\hspace{2cm}}$$



Name: _____

Date: _____

Let's Solve
Word Problems With 3 Numbers

There are 8 black dogs, 2 brown dogs, and 3 white dogs in the park. How many dogs are there altogether?

_____ dogs

I read 3 books on Monday, 3 books on Tuesday, and 4 books on Wednesday. How many books did I read in all?

_____ books